




Sec 3.4 Multiplying Mixed Numbers (Mixed Fractions)

Use an area model to find each product.

1. $\frac{2}{3} \times \frac{5}{4}$

2. $\frac{2}{5} \times 1\frac{3}{4}$



➤ To multiply mixed numbers, _____

eg. $1\frac{2}{5} \times 2\frac{3}{4}$

Practice

a) $1\frac{3}{8} \times \frac{1}{8}$

b) $3\frac{1}{3} \times \frac{2}{15}$

c) $1\frac{2}{6} \times 3\frac{3}{4}$